

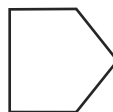

- 1) Complete the sentences:

The angle in the corner of a square is called a _____ angle.


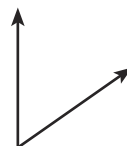

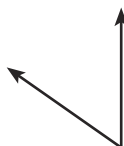
A right angle is the same as a _____ turn.



- 2) Colour any shapes with right angles, then mark each right angle with a small square using your pencil or pen:



- 3) Toby the turtle has turned a quarter of a circle clockwise to make a right angle. Circle the pair of arrows that shows his turn.



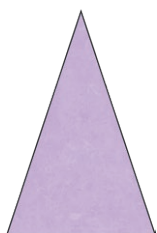


- 1) Write your own name here in capital letters: _____

How many right angles can you find in your name? _____



- 2) Circle the odd one out:



Explain why you chose it: _____



- 1) Draw a line to match the shape to the description:



Caroline

My shape has more than double the number of right angles that Akeem's shape has.



Akeem

My shape has three right angles.



Harvey

My shape has fewer right angles than Caroline's.



- 2) Draw a **picture** with exactly 20 right angles. Use squared paper to help.